

1. 영상을 보며 2단 곱셈을 외워 봅시다.

※ 열심히 연습했으면 ○ 표시해요.

함께하기	스스로 하기	나의 카드로 구구단

2. 덧셈 문제를 풀어보세요. (곱셈을 더 잘하게 해주는 덧셈문제)

$2 + 2 = \square$

$16 + 2 = \square$

$4 + 2 = \square$

$18 + 2 = \square$

$6 + 2 = \square$

$10 + 2 = \square$

$8 + 2 = \square$

$10 + 4 = \square$

$10 + 2 = \square$

$10 + 6 = \square$

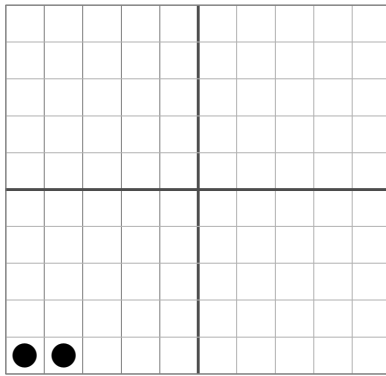
$12 + 2 = \square$

$10 + 8 = \square$

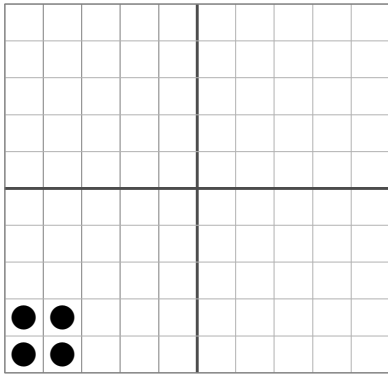
$14 + 2 = \square$

$10 + 10 = \square$

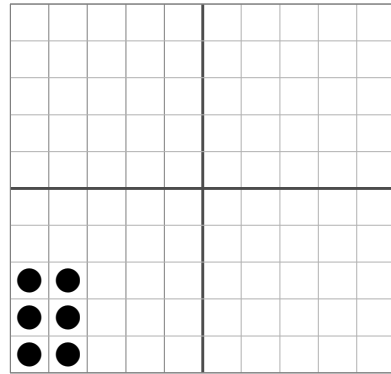
3. 아래와 같이 그림을 보고 곱셈식을 완성하세요.



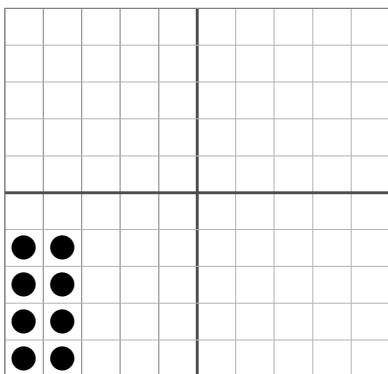
$$\boxed{2} \times \boxed{1} = \boxed{2}$$



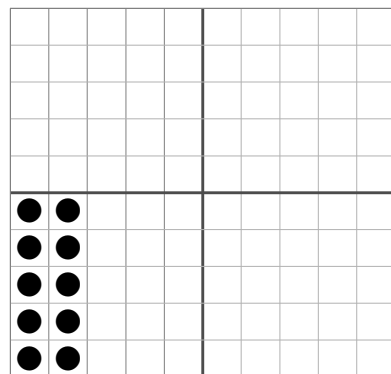
$$\boxed{2} \times \boxed{} = \boxed{}$$



$$\boxed{2} \times \boxed{} = \boxed{}$$

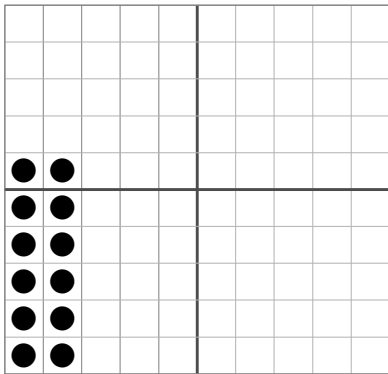


$$\boxed{} \times \boxed{} = \boxed{}$$

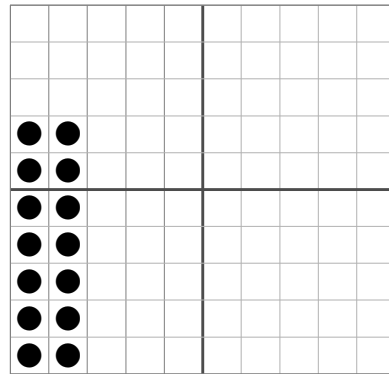


$$\boxed{} \times \boxed{} = \boxed{}$$

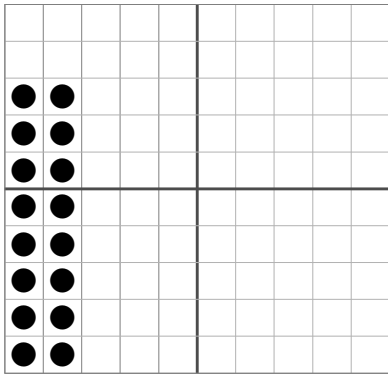
4. 아래와 같이 그림을 보고 곱셈식을 완성하세요.



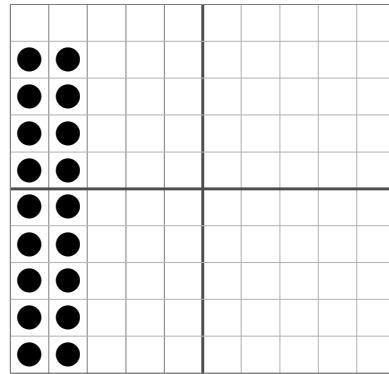
$$\boxed{2} \times \boxed{} = \boxed{}$$



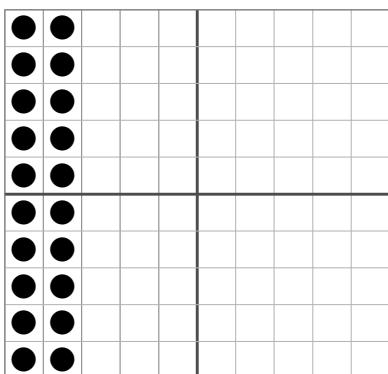
$$\boxed{} \times \boxed{} = \boxed{}$$



$$\boxed{} \times \boxed{} = \boxed{}$$



$$\boxed{} \times \boxed{} = \boxed{}$$

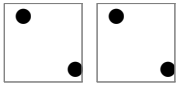


$$\boxed{} \times \boxed{} = \boxed{}$$


5. 아래와 같이 그림을 보고 곱셈식을 완성하세요.



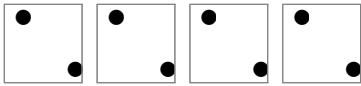
$$\boxed{2} \times \boxed{1} = \boxed{2}$$




$$\boxed{2} \times \boxed{\quad} = \boxed{\quad}$$



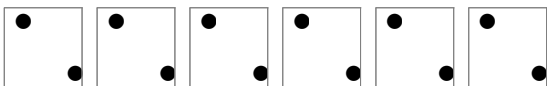
$$\boxed{2} \times \boxed{\quad} = \boxed{\quad}$$




$$\boxed{\quad} \times \boxed{\quad} = \boxed{\quad}$$



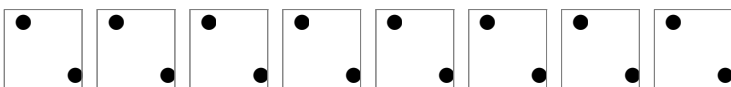
$$\boxed{\quad} \times \boxed{\quad} = \boxed{\quad}$$




$$\boxed{\quad} \times \boxed{\quad} = \boxed{\quad}$$



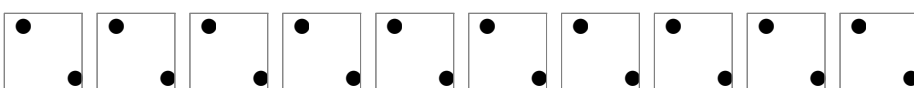
$$\boxed{\quad} \times \boxed{\quad} = \boxed{\quad}$$



$$\boxed{\quad} \times \boxed{\quad} = \boxed{\quad}$$



$$\boxed{\quad} \times \boxed{\quad} = \boxed{\quad}$$



$$\boxed{\quad} \times \boxed{\quad} = \boxed{\quad}$$

2단 곱셈은 ()씩 커지고 있어요!

6. 2부터 2씩 뛰어선 수에 ○표시 하고, 빈칸에 알맞은 답을 쓰세요.

1	2	3	4	5	6	7	8	9	10
11	12	13	14	15	16	17	18	19	20

$2 \times 1 =$	<input type="text"/>	$2 \times 2 =$	<input type="text"/>	$2 \times 3 =$	<input type="text"/>
$2 \times 4 =$	<input type="text"/>	$2 \times 5 =$	<input type="text"/>	$2 \times 6 =$	<input type="text"/>
$2 \times 7 =$	<input type="text"/>	$2 \times 8 =$	<input type="text"/>	$2 \times 9 =$	<input type="text"/>
$2 \times 10 =$	<input type="text"/>				

7. 알맞은 곱셈식과 답을 연결하세요.

2×1	•	•	8
2×2	•	•	6
2×3	•	•	14
2×4	•	•	4
2×5	•	•	16
2×6	•	•	18
2×7	•	•	12
2×8	•	•	2
2×9	•	•	20
2×10	•	•	10

8. 뛰어세기를 하며 곱셈을 해보세요.

2단

